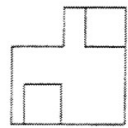
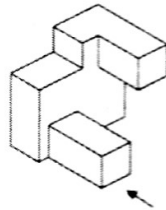


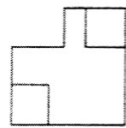
MODEL QUESTION OF
CLASS-XI
ENGINEERING & DRAWING

MCQ-Assertion-Reason type question

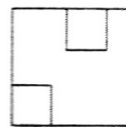
Q.1. The fig, shows the 3-D view of an object. Identify the correct front view from the following figures:



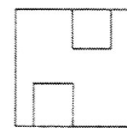
(1)



(2)

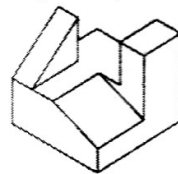


(3)



(4)

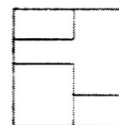
Q.2. The fig, shows the 3-D view of an object. Identify the correct top view from the following figures:



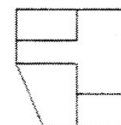
(1)



(2)



(3)



(4)

Source based question

Q.3 Draw to scale 1:1 the following views of the machine block shown pictorially in the fig. 1 (use First angle method of projection):

- i) Front view looking in the direction of arrow
- ii) Side view as seen from left
- iii) Top view

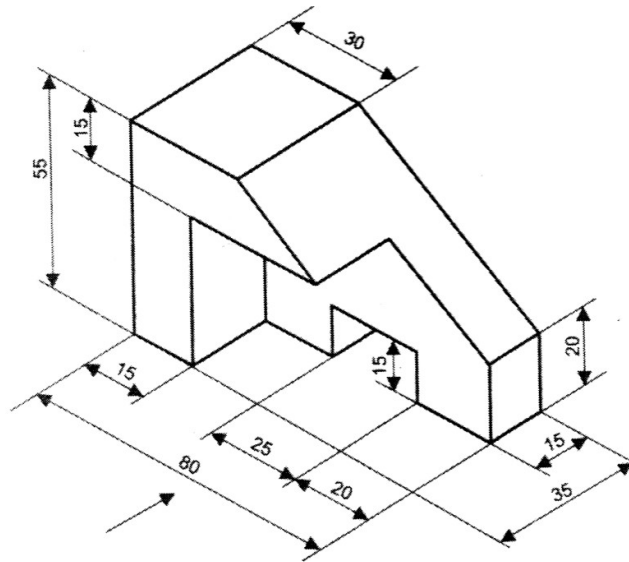


Fig:1